

Do not open this Question Booklet until you are asked to do so.

Number of Pages : 24

No. of Questions : 200

BKS-IV

Marks : 600

Time : 03 Hours

Booklet Series

B

Question Booklet No.

Candidate's Roll No. :

--	--	--	--	--	--	--	--

O.M.R. No. :

--	--	--	--	--	--

Candidate's Signature _____

Invigilator's Signature : 1. _____

2. _____

INSTRUCTIONS FOR CANDIDATES

1.	The Question Paper consists of four sections : Section-A Mental Ability of 50 questions (Q.No. 1 to 50), Section-B Teaching Aptitude and Attitude of 50 questions (Q.No. 51 to 100), Section-C General Awareness of 50 questions (Q.No. 101 to 150) and Section-D English OR Hindi of 50 Questions (Q.No. 151 to 200).
2.	Write your entries like Question Booklet No. and Subject selected for Section-D etc. very carefully and fill the relevant circles on the OMR Answer Sheet.
3.	For filling the OMR Answer Sheet and darkening the circle use Blue/Black Ball Point Pen only.
4.	Answer all questions. <u>There will be no negative marking.</u>
5.	3 marks are allotted for correct answer of each question of section A, C, D and 3, 2, 1 and 0 marks are allotted respectively on preference for correct answer of section ' B ' Teaching Aptitude.
6.	Each question has four alternative responses marked serially as A, B, C, D . You have to darken only one circle or bubble indicating the correct answer on the Answer Sheet using Blue/Black Ball Point Pen . Darkening more than one circle would be treated as wrong answer.
7.	In case of missing pages, missing questions or any kind of printing discrepancy/defect in Question Booklet, candidates may put their objections to invigilator within 5 minutes and obtain another Question Booklet.

There are two copies of the answer sheet - original copy and carbon copy. At the end of the examination, before leaving the examination hall, the candidate will hand over both the copies of the answer sheet to the invigilator. Candidates should not separate the carbon copy themselves. The invigilator will keep the original copy of the answer sheet with him and carefully separate the carbon copy from the original copy by folding it along the cut line and hand it over to the candidate, which the candidate will take with him. The candidate will have to keep the carbon copy of the answer sheet safe till the admission process is completed.



Space for Rough Work

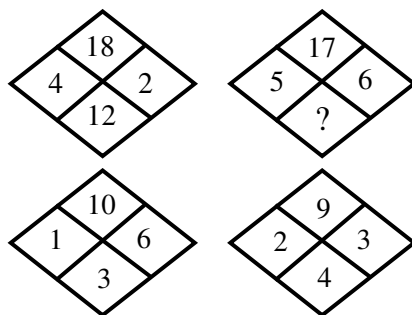
Section-A
Mental Ability

- Find out the missing two words -
Supervisor : Worker :: :
(A) Junior : Senior (B) Elder : Younger (C) Officer : Clerk (D) Debtor : Creditor
- If in a certain language, UTENSIL is coded as WVGPUKN, then which word would be coded as DMSFXG?
(A) BKQEVE (B) BKQDWE (C) BKQDVF (D) BKQDVE
- '?' will be replaced by which of the following number?

6	?	9	16
4	3	64	36

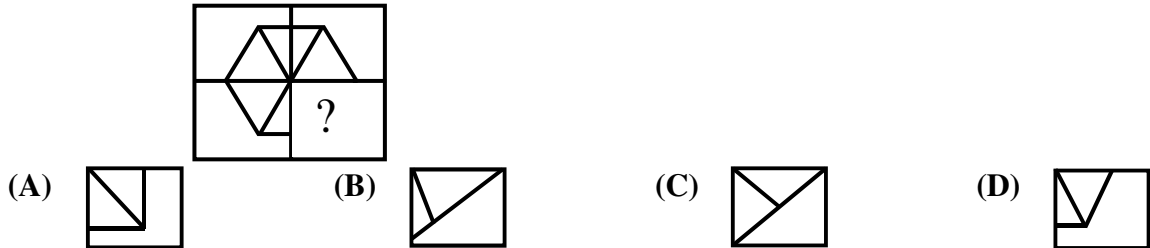
- (A) 6 (B) 4 (C) 8 (D) 12
- At 5 O'clock, a clock ticks 5 times. The time gap between the first and last tick is 40 seconds. How long does the clock tick when it is 12 O'clock?
(A) 60 seconds (B) 110 seconds (C) 95 seconds (D) 105 seconds
 - When Rahul was born, his father was 32 years older than his brother and his mother was 25 years older than his sister. If Rahul's brother is 6 years older than him and his mother is 3 years younger than his father, then how old was Rahul's sister when he was born?
(A) 7 years (B) 10 years (C) 14 years (D) 19 years
 - Select the option in which the words share the same relationship as that given in the following words-
Evaporation : Cloud : Rain
(A) Sneezing : Cough : Cold (B) Accident : Injury : Pain
(C) Tanning : Leather : Purse (D) Bud : Flower : Fragrance
 - Choose the correct alternative -
.....?.....is to Sri Lanka as Delhi is to.....?.....
(A) Colombo, India (B) Island, Harbour (C) India, Paris (D) Kathmandu, Capital
 - If MOBILITY is coded as 46293927, then EXAMINATION will be coded as -
(A) 45038401854 (B) 56149512965 (C) 57159413955 (D) 67250623076
 - If $2 + 3 = 13$
 $3 + 4 = 25$
 $4 + 5 = 41$
Then $5 + 6 = ?$
(A) 55 (B) 61 (C) 71 (D) 65
 - A dice has numbers 1-6. If 1 is opposite to 6 and 2 is opposite to 5, then what will be opposite to 3?
(A) 4 (B) 5 (C) 6 (D) 2
 - If "×" means "+" and "+" means "-", then $8 \times 4 + 2 = ?$
(A) 10 (B) 14 (C) 12 (D) 6
 - If CIGARETTE is coded as GICERAETT, then DIRECTION will be coded as -
(A) RIDTCENOI (B) NORTECDII (C) NOIETCRID (D) IRDCTIONE
 - In a certain code 'JUDICIAL' is written as 'LAUJICID'. How will 'GLORIOUS' be written in that code?
(A) LGSUROOL (B) SULGOIRO (C) SULGROOL (D) USGLIOOR

14. Choose the word which is different from the others -
 (A) Kanpur (B) Allahabad (C) Varanasi (D) Mathura
15. In a certain code language, 'FIRE' is coded as 'DGPC'. What will be the last letter of the coded word for 'SHOT' ?
 (A) Q (B) P (C) R (D) S
16. Which term of the series 5,10, 20, 40, is 1280?
 (A) 10th (B) 11th (C) 8th (D) 9th
17. Four girls are sitting on a bench to be photographed. Shikha is to the left of Reena. Manju is to the right of Reena. Rita is between Reena and Manju. Who would be second from the left in the photograph?
 (A) Reena (B) Shikha (C) Manju (D) Rita
18. If - 7 → 56
 9 → 90
 11 → 132
 Then 13 → ?
 (A) 156 (B) 170 (C) 182 (D) 196
19. Find out the missing word -
 Ankle : Knee :: Wrist :
 (A) Elbow (B) Foot (C) Finger (D) Hand
20. Complete the series -
 OTE, PUF, QVG, RWH, ?
 (A) SYJ (B) TXI
 (C) SXJ (D) SXI
21. Choose the word which is different from the other words in the group -
 (A) Poland (B) Greece (C) Spain (D) Korea
22. Which number will replace the question mark?



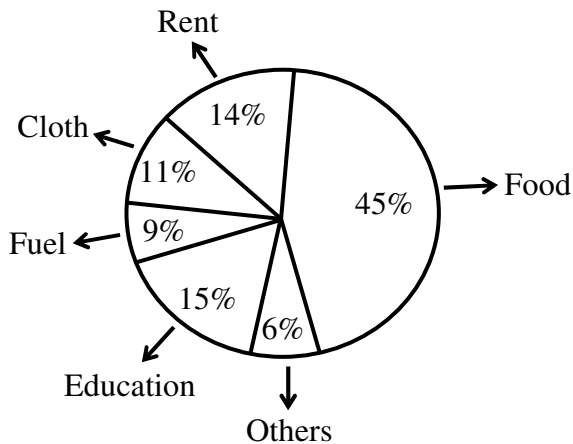
- (A) 3 (B) 14 (C) 6 (D) 9
23. Complete the series -
 1, 4, 2, 8, 6, 24, 22, 88, ?
 (A) 86 (B) 90 (C) 352 (D) 92
24. If CLOCK is written as DMPDL, then WATCH will be written as -
 (A) XBUDI (B) XCVFI (C) XBUHG (D) XBVFI

25. Identify the correct logical sequence -
 (1) Hunger (2) Eating (3) Energy (4) Digestion
 (A) (1)→(2) →(4) →(3) (B) (2)→(1) →(3) →(4)
 (C) (1)→(4) →(2) →(3) (D) (4)→(2) →(1) →(3)
26. Pigeon : Peace :: White Flag : ?
 (A) Friendship (B) Victory (C) Surrender (D) War
27. Complete the pattern by choosing the correct alternative -



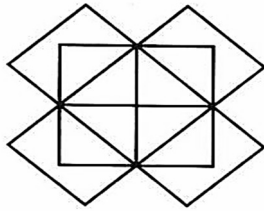
28. If train is called bus, bus is called tractor, tractor is called car, car is called scooter, scooter is called bicycle, bicycle is called moped, then what is used to plough a field?
 (A) Train (B) Bus (C) Tractor (D) Car
29. Today is Friday. On the last Monday, the date was 29th December, 1975. The date today is -
 (A) 26 December, 1975 (B) 3 January, 1976 (C) 2 January, 1976 (D) 2 January, 1975
30. If a figure is rotated 90° clockwise, then what will be its new position?
 (A) Upside down (B) Right side (C) Left side (D) Same position

Direction : (Q. No. 31 to 34) Study the following chart carefully and answer the following questions -



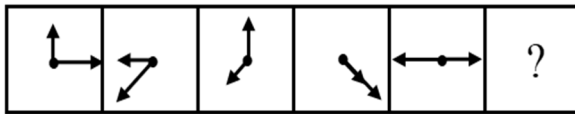
31. Expenditure on which three heads constitutes an angle of 108° at origin?
 (A) Fuel, Cloth, Others (B) Cloth, Rent, Others
 (C) Fuel, Education, Others (D) Education, Rent, Others
32. What is the proportion of expenditure incurred on education and food?
 (A) 3:1 (B) 1:3 (C) 3:5 (D) 5:3
33. If the total family income is ₹ 25000, then how much has been spent on rent and food?
 (A) ₹ 11250 (B) ₹ 8920 (C) ₹ 15840 (D) ₹ 14750
34. What is the percentage of expenditure incurred on rent with respect to expenditure on fuel?
 (A) 135.56% (B) 155.56% (C) 172.56% (D) 167.56%

35. How many rectangles does the following figure have?



- (A) 14 (B) 13 (C) 12 (D) 08

36. Which figure will come next in the series?



- (A)  (B)  (C)  (D) 

37. One morning, after sunrise Reshma and Kiara were talking to each other face to face in a park. If Kiara's shadow was exactly to the right of Reshma, then which direction was Kiara facing?

- (A) East (B) North (C) South (D) Data Inadequate

38. Arrange the following letters into a meaningful word and find out the 4th letter of that word formed from the given alternatives -

R C E I P

- (A) I (B) C (C) E (D) R

39. If 15 men can do a work in 40 days, then in how many days 20 men can finish the same work?

- (A) 20 days (B) 35 days (C) 30 days (D) 25 days

40. The total age of Karan and Kishan is 12 years more than that of total age of Kishan and Kaushal. Kaushal is how many years younger than Karan?

- (A) Kaushal is older than Karan (B) 24 years (C) 12 years (D) Data Inadequate

41. Write the following words in the order in which they appear in the dictionary -

(i) Investigate (ii) Invariable (iii) Involuntary (iv) Invisible (v) Inventory

- (A) (i), (iii), (ii), (v), (iv) (B) (v), (iv), (ii), (iii), (i)
(C) (iv), (v), (ii), (i), (iii) (D) (ii), (v), (i), (iv), (iii)

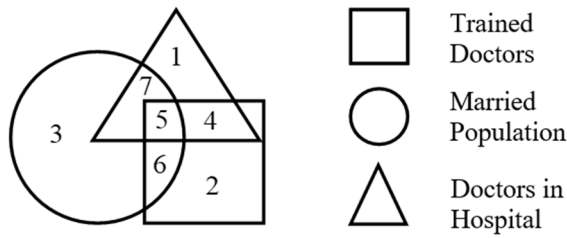
42. If the price of an induction plate is increased by 25%, then by what percentage should the new price be reduced to bring the price back to the original level?

- (A) 15% (B) 20% (C) 30% (D) 25%

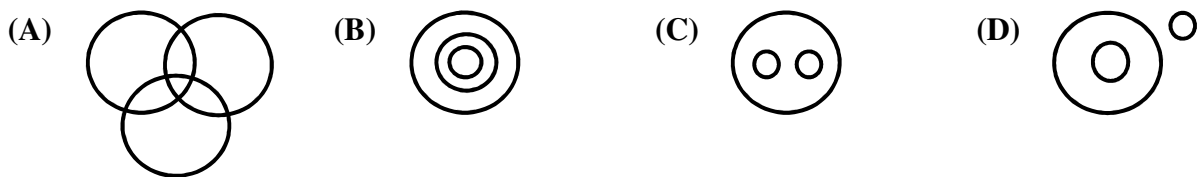
43. Select the option in which the words share the same relationship as that given in the following words-
Mountain : Height : Climber

- (A) River : Length : Water (B) Land : Farmer : Crop
(C) College : Building : Student (D) Sea : Depth : Diver

Direction : (Q. No. 44 to 46) Study the following figure and answer the questions given below –



44. If hospital requires only married trained doctors for operation, which number will represent this?
 (A) 1 (B) 4 (C) 6 (D) 5
45. By which number unmarried but trained doctors in the hospital are represented?
 (A) 4 (B) 1 (C) 6 (D) 2
46. What is represented by number 7?
 (A) Trained Nurses (B) Married Doctors
 (C) Trained Doctors in the Hospital (D) Married Doctors in the Hospital
47. Which Venn diagram will best represent the relationship amongst the given three elements?
 Carrot, Food, Vegetables



48. The average of 5 observations is 15. If three new observations 16.5, 18 and 14.5 are added, then find the new average -
 (A) 15.5 (B) 14.8 (C) 16.5 (D) 16.2
49. Ayesha walks 20 meters North, then she turns right and walks 30 meters. Now, she turns right and walks 35 meters. Now turning left she walks 15 meters, again she turns left and moves 15 meters. In which direction and how far is she from her original position?
 (A) 45 meters, West (B) 15 meters, East (C) 45 meters, East (D) 15 meters, West
50. Read the given Statements and Conclusions and then decide which conclusion/s logically follow/s the two given statements :
- Statement** - (1) Some men are women.
 (2) All women are beautiful.
- Conclusion** - (I) All men are Beautiful.
 (II) All women are men.
- (A) Only conclusion (I) follows. (B) Only conclusion (II) follows.
 (C) Both (I) and (II) follow. (D) Neither (I) nor (II) follows.

Section-B
Teaching Aptitude and Attitude

51. During parent-teacher meeting, what will be your preference?
(A) To acquaint parents with problems of their wards.
(B) Make parents aware about the role of both parents and teachers in wholesome development of the student.
(C) Invite feedback from the parents.
(D) Give priority to parents of intelligent students.
52. While planning a lesson, your primary focus is -
(A) aligning learning activities with diverse student needs.
(B) completing the syllabus within the allotted time frame.
(C) preparing a high-quality lecture for the students to hear.
(D) finding the easiest way to deliver the content quickly.
53. Which of the following trait is most essential in the personality of the teacher?
(A) Attractive physique
(B) Command over the voice
(C) Understanding of students and subject matter
(D) Skill of presenting the subject knowledge at the satisfaction level of all students of the class
54. When communicating with parents from diverse linguistic backgrounds, a teacher should -
(A) ask the student to translate everything to their parents.
(B) avoid communication to prevent misunderstanding.
(C) use simple, jargon-free language and visual aids if necessary.
(D) use formal academic english/hindi to maintain professional standards.
55. Primary cause of declining social maturity in students is -
(A) Excessive screentime and social media
(B) Excessive involvement in co-curricular activities
(C) Excessive involvement in family activities
(D) Excessive involvement in studies
56. The classroom leadership style which promotes social maturity in learners in best way is -
(A) Authoritarian - Strict obedience to teacher's rules without question
(B) Authoritative - High expectations with clear rules and warmth
(C) Democratic - Students participate in rule-making and decision-making
(D) Laissez-faire - Complete freedom with little to no teacher guidance
57. According to you, which one of the following leadership styles is best?
(A) Autocratic style (B) Laissez-faire style
(C) Democratic style (D) Protective style
58. What is the best practice for developing social maturity in students?
(A) Encourage them to participate in group activity
(B) Encourage them to write some of their experiences
(C) Show them some motivational videos
(D) Encourage them to listen to motivational lectures
59. You observe that in your class one student is not able to adjust with other students. As a teacher, in your opinion, what is this problem?
(A) Lack of social maturity (B) Lack of personal maturity
(C) Lack of emotional maturity (D) Lack of cultural maturity
60. 'Clarity of speech' in a teacher primarily involves -
(A) using a loud and aggressive tone to command students' attention.
(B) speaking as fast as possible to cover more information.
(C) using a sophisticated vocabulary related to subject.
(D) proper pronunciation, moderate pace and logical sequencing of ideas.

61. In your school, students bring mobile phone. As a Principal, how can you discourage this habit?
- (A) By punishing students
 - (B) By informing parents
 - (C) By telling students about the pros and cons of mobile
 - (D) By confiscating students' mobiles
62. How should a teacher promote gender equality in a classroom setting?
- (A) By occasionally talking about famous women in history
 - (B) By seating boys and girls separately to avoid conflict
 - (C) By ensuring equal participation and using gender neutral examples
 - (D) By assigning tasks based on traditional gender roles
63. Which of the following types of listening in communication is most vital for a teacher for solving problems of students in class?
- (A) Appreciative listening
 - (B) Sympathetic listening
 - (C) Empathetic listening
 - (D) Therapeutic listening
64. Which of the following statement is most indicative of a socially immature person?
- (A) Does not listen to others
 - (B) Not interested in helping others
 - (C) Often quarrels with peers
 - (D) Not able to understand other's views
65. Teachers can play a crucial role in the development of social maturity in students -
- (A) By role modeling behaviour
 - (B) By establishing strict rules in school
 - (C) By role modeling behaviour and promoting collaborating learning
 - (D) By establishing strict rules in classroom
66. During group work, one student dominates while others remain silent. Your reaction will be -
- (A) Ignore the group dynamics as long as the work is completed.
 - (B) Guide the group to ensure equal participation and respect among members.
 - (C) Suggest that everyone should contribute to the discussion.
 - (D) Let the dominant student lead the task entirely.
67. When implementing classroom activities, a teacher will -
- (A) allow limited student participation in planning activities.
 - (B) decide all activities without student suggestion.
 - (C) avoid practical activities and rely solely on lectures.
 - (D) encourage student initiatives and shared decision-making.
68. How should a teacher respond to a colleague who speaks negatively about a student in the staff room?
- (A) Redirect the conversation towards finding solutions to help the student.
 - (B) Listen quietly without participating in the negative comments.
 - (C) Join the conversation to share your own frustrations with the student.
 - (D) Report the administration for colleague's unprofessionalism.
69. A teacher demonstrating instructional leadership will -
- (A) encourage collaborative learning and student participation.
 - (B) deliver well-structured lectures with limited interaction.
 - (C) focus on completing the syllabus quickly.
 - (D) teach from the textbook without any discussion.
70. For the social and emotional development of students, which of the following option is imperative for a teacher?
- (A) To encourage classroom participation and collaboration
 - (B) To initiate discussions about regulating emotions
 - (C) To provide clear classroom rules
 - (D) To develop mutual trust and empathy

71. Which of the following goals is most important for a school leader?
 (A) Satisfying needs (B) Innovation
 (C) Providing learning opportunities (D) Maintaining the school
72. A student criticizes your teaching approach in front of the class. How will you react?
 (A) Listen calmly, appreciate feedback and clarify your approach respectfully.
 (B) Explain your reasoning briefly and continue the lesson.
 (C) Ask the student to discuss the issue after class.
 (D) Reprimand the student immediately for being disrespectful.
73. The most appropriate meaning of learning is -
 (A) Modification of the behaviour of learner
 (B) Social awareness
 (C) Preparing learner for getting employment
 (D) Individual adjustment of learner
74. The most important factor of the success of any teacher in the class may be -
 (A) his acceptance among students.
 (B) his ability in handling the class.
 (C) his competence towards understanding feelings of the students and command over the subject matter.
 (D) his authoritarian leadership.
75. Solving students' indiscipline problem in school is the -
 (A) joint responsibility of teachers.
 (B) responsibility of class-room teacher.
 (C) responsibility of parents.
 (D) joint responsibility of teachers and parents.
76. What is essential for the development of the personality of your students?
 (A) They should always remain present in their class.
 (B) They should play with full confidence in playground.
 (C) They should not waste their time in extra co-curricular activities of the school.
 (D) They should always participate in all curricular and co-curricular activities of the school up to their optimum satisfaction level.
77. When participating in community events, a teacher's conduct should be -
 (A) Observational, attending to fulfil administrative requirements
 (B) Professional but keeping professional and personal lives separate
 (C) Casual, as community events are not part of school duties
 (D) Exemplary, acting as a bridge between school and society
78. How should a teacher use non-verbal communication (Body language) during a lecture?
 (A) Maintain eye contact and move around the room to engage everyone.
 (B) Stand firmly at the podium to maintain a professional image.
 (C) Keep hands in pockets to appear relaxed and approachable.
 (D) Look only at the notes or the blackboard to avoid distraction.
79. Which of the following is the most important requisite for a professionally committed teacher?
 (A) Committed for continuous and lifelong learning
 (B) To overcome the barriers that come to include all learners
 (C) Meet the needs of individual students
 (D) Transact the curriculum with full responsibility
80. Which of the following is most important for a teacher?
 (A) Self-awareness
 (B) Pedagogical awareness
 (C) Awareness about managing one's own emotions
 (D) Awareness about socio-cultural background of students (learners)

81. In a parent-teacher meeting, a parent blames you for their child's poor social skills. Your response is -
- (A) Collaboratively discuss a joint plan for child's social development.
 - (B) Provide data showing that other students are progressing fine.
 - (C) Politely explain the school's social curriculum and your efforts.
 - (D) Defensively point out the parent's lack of involvement at home.
82. For the success of a school, what is the most important component?
- (A) Environment of the school
 - (B) Physical facilities of the school
 - (C) Beautification of the school
 - (D) Enrolment of the students
83. A teacher's role as a leader in classroom management is best reflected when the teacher -
- (A) creates a positive learning environment.
 - (B) maintains discipline through rules.
 - (C) controls the class through strict authority.
 - (D) allows students to manage themselves without guidance.
84. During teaching in your classroom some students are bullying one student. At this time, what will you do immediately?
- (A) Scold students who are bullying
 - (B) Ignore the situation
 - (C) Stop students from bullying
 - (D) Call students to meet after class
85. A student from a different cultural background feels isolated in class. What would you do?
- (A) Promote inclusivity and encourage classmates to appreciate diversity.
 - (B) Talk privately with the student and offer emotional support.
 - (C) Suggest the student to adjust to the class environment.
 - (D) Ignore the situation because it does not affect the lesson directly.
86. When students provide feedback about teaching methods, a teacher should -
- (A) reflect on the feedback and improve own's teaching practices.
 - (B) listen but rarely modify teaching methods.
 - (C) consider feedback only from high-performing students.
 - (D) ignore student feedback completely.
87. When should parents be invited in school in some emergency situation?
- (A) Some emergency situation
 - (B) In an annual function in school
 - (C) To encourage them to donate fund
 - (D) To take important suggestion about school
88. A teacher can maintain good relations with students by -
- (A) completing syllabus in time.
 - (B) not discriminating on the basis of caste.
 - (C) treating with love and dignity.
 - (D) maintaining distance with students.
89. How should a teacher provide feedback on students' poorly written assignment?
- (A) Read the assignment aloud in class as an example of what not to do.
 - (B) Give a low grade and tell the student to 'work harder'.
 - (C) Correct every mistake with red ink and ask the student to rewrite it.
 - (D) Highlight their strengths first, then provide specific actionable suggestions.
90. As a Principal, you are instructed by higher authorities to do creative task in school. For achieving this task, you will -
- (A) force students and teachers to work.
 - (B) encourage students and teachers for work.
 - (C) work in collaboration with students and teachers.
 - (D) take disciplinary action against students and teachers who do not take interest in work.
91. What is the most important outcome of a classroom discussion?
- (A) Ensuring every single student has spoken at least once.
 - (B) Developing students critical thinking and respecting diverse views.
 - (C) Completing the discussion quickly to stay on schedule.
 - (D) Students arriving at the one 'correct' answer provided by the teacher.

92. Which one of the following is the most important attribute of a leader?
 (A) Influencing others (B) Encouraging interpersonal relationships
 (C) Decision making (D) Self-motivated
93. Which of the following is the most important element of social maturity?
 (A) Self-sufficiency (B) Communication
 (C) Self-direction (D) Social interaction
94. If a student of your class is weak in all subjects, then what will you do?
 (A) I will try to know the causes of his weakness.
 (B) I will try to find out his areas of interest.
 (C) I will discuss with him about his fields of interest and give him opportunity to grow in those fields.
 (D) I will not care about him.
95. How should a teacher react when a student makes a socially inappropriate remark in class?
 (A) Privately reprimand the student after the class ends.
 (B) Publicly punish the student to set an example for others.
 (C) Use it as 'teachable moment' to discuss social norms and empathy.
 (D) Laugh it off to avoid an awkward situation in the classroom.
96. As a Principal, you observe one teacher always complains about other colleagues to get favour from you. In this situation, what will you do?
 (A) Encourage teacher to give maximum information about other teachers
 (B) Ignore the teacher's habit
 (C) Warn teacher for such habit
 (D) Discourage teacher for this habit
97. The primary role of a teacher in fostering social maturity among students is -
 (A) modelling prosocial behaviour and emotional intelligence consistently.
 (B) teaching specific lessons on ethics and social values from textbooks.
 (C) maintaining a strict hierarchy to ensure discipline and order.
 (D) focusing on academic content, leaving social growth to parents.
98. A new curriculum is introduced that you personally find to be ineffective for your students. What will you do?
 (A) Implement the curriculum faithfully while documenting specific concerns with data, then formally present these findings to the academic committee with suggested modifications.
 (B) Supplement the prescribed curriculum with your own materials to cover the perceived gaps.
 (C) Follow the curriculum as directed and wait for the official review cycle to raise concerns.
 (D) Avoid teaching portions you find ineffective and replace them with your own preferred content without informing administration.
99. A professionally committed teacher must be proficient in which of the following?
 (A) Content knowledge and pedagogy
 (B) Learning environment and diversity of learners
 (C) Curriculum planning, assessment and reporting
 (D) Community linkages and professional development
100. An effective teacher is one -
 (A) who always pays attention to students in class.
 (B) who always takes classes regularly.
 (C) whose students are always curious to attend the class.
 (D) who teaches with his permanently prepared notes.

Section-C
General Awareness

101. Kalidas was one of the Navaratanas (Nine Gems) of which ruler?
(A) Samudragupta (B) Ashoka (C) Chandragupta II (D) Skandgupta
102. By defeating which of the following team, India reached in the final of the South Asian Football Federation U-20 Championship, 2026?
(A) Bangladesh (B) Bhutan (C) Maldives (D) Pakistan
103. Which one of the following pairs is not correctly matched?
(A) Inscription of Sunda Mountain - 1262 A.D. (B) Inscription of Chirwa - 1273 A.D.
(C) Inscription of Delwara - 1234 A.D. (D) Inscription of Bijoliya - 1170 A.D.
104. Who are eligible to join the International Solar Alliance?
(A) All Kyoto Protocol Signatory States (B) All the United Nations' Member States
(C) All the Small Island Developing States (D) All the Equatorial States
105. Which Ministry has developed PARIVESH 2.0?
(A) Ministry of Education (B) Ministry of Environment, Forest and Climate Change
(C) Ministry of Culture (D) Ministry of External Affairs
106. Which is the first Biosphere Reserve of India?
(A) Nilgiri (B) Nanda Devi (C) Sundarban (D) Gulf of Mannar
107. Who among the following established the 'Asiatic Society of Bengal'?
(A) Warren Hastings (B) William Jones (C) Lord Macaulay (D) Lord Canning
108. Which of the following is not correctly matched?
- | Dance | Region |
|------------------|----------------|
| (A) Bharatnatyam | Tamil Nadu |
| (B) Kathakali | Kerala |
| (C) Kuchipudi | Andhra Pradesh |
| (D) Mohiniyattam | Maharashtra |
109. Khejadli Mela is associated with -
(A) Amrita Devi (B) Ruma Devi (C) Jhamku Devi (D) Anjana Devi
110. Who among the following is not associated with the 'Bengal School of Painting'?
(A) Nandalal Bose (B) Abanindranath Tagore
(C) Raja Ravi Verma (D) Binod Behari Mukherjee
111. Which of the following statement is not true regarding Dr. Bhupen Hazarika?
(A) Year 2026 is his birth-centenary year.
(B) He is also known as the 'Bard of Brahmaputra'.
(C) He was awarded Bharat Ratna in 2012.
(D) He is popularly known as 'Sudhakantha'.
112. Where is Mahatma Gandhi Marine National Park situated?
(A) Chikmanglur (B) Wandoor (C) Puri (D) Dandi Kutir
113. During imprisonment in which fort, Jawahar Lal Nehru wrote 'The Discovery of India'?
(A) Ahmednagar (B) Allahabad (C) Poona (D) Raigarh

114. Who was appointed for administration of justice by Ashok, the Mauryan Emperor?
 (A) Mahamatra (B) Rajjuk (C) Teerth (D) Sannidhata
115. When was the High Court of Rajasthan duly inaugurated?
 (A) 27th March, 1949 (B) 29th August, 1949
 (C) 26th January, 1950 (D) 3rd September, 1949
116. Identify the incorrect pair of center of 1857 Revolt and its major leader -
 (A) Kanpur - Nana Sahib (B) Lucknow - Hazrat Mahal
 (C) Faizabad - Maulavi Ahmadullah (D) Arrah – Bakht Khan
117. When was Shri Gurumukh Nihal Singh appointed as the first Governor of Rajasthan?
 (A) 30th March, 1949 (B) 1st November, 1956
 (C) 25th October, 1956 (D) 26th January, 1950
118. Which of the following pair is not correctly matched?
 (A) Ban on Sati Pratha - 1829
 (B) Act passed in the support of Widow Marriage - 1856
 (C) Child Marriage Prohibition Act -1929
 (D) Establishment of Muhammadan Anglo-Oriental College - 1930
119. Identify the sea-coastal city of Harappan culture -
 (A) Banawali (B) Surkotada (C) Chanhudaro (D) Rojdi
120. Which among the following book was not authored by Dr. B.R. Ambedkar?
 (A) Who were the Shudras? (B) Riddles in Hinduism
 (C) Waiting for a Visa (D) Gulamgiri
121. Who among the following Governor Generals of Bengal/India, was the propounder of the system of ‘Subsidiary Alliances’?
 (A) Lord Cornwallis (B) Lord Wellesley
 (C) Lord Francis Hastings (D) Lord William Bentick
122. Match List-I with List-II and give the correct answer with the help of the code given below –
- | List-I | List-II |
|--------------------|-------------------------|
| (i) Troposphere | (a) Radio Communication |
| (ii) Stratosphere | (b) Hydrogen Swims |
| (iii) Thermosphere | (c) Ozone Gas Layer |
| (iv) Exosphere | (d) Weather Occurs |
- (A) (i)-(d), (ii)-(c), (iii)-(b), (iv)-(a) (B) (i)-(d), (ii)-(c), (iii)-(a), (iv)-(b)
 (C) (i)-(c), (ii)-(d), (iii)-(a), (iv)-(b) (D) (i)-(b), (ii)- (a), (iii)-(d), (iv)-(c)
123. When did the Rajasthan Land Reforms and Resumption of Jagirs Act come into force?
 (A) 1952 (B) 1956 (C) 1959 (D) 1960
124. Where was the 14th Ministerial Conference (MC14) of the World Trade Organization organised from 26th to 30th March, 2026?
 (A) Kenya (B) Morocco (C) Cameroon (D) South Africa
125. Who among the following Pedhi maintains the Dilwara Jain temple, Mount Abu?
 (A) Shri Bhandasar Pedhi (B) Shri Sanwaliyaji Pedhi
 (C) Shri Anandji Kalyanji Pedhi (D) Shri Kalyanji Paramanandji Pedhi

126. Which one of the following states is not a part of the Aravalli Mountain Range?
 (A) Haryana (B) Gujarat (C) Uttar Pradesh (D) Rajasthan
127. With reference to Sridhar Makam Krishnamurthy, consider the following statements -
 (1) He was awarded Padma Shri in 2024.
 (2) He is associated with education policy and reforms.
 (3) He has contributed to defence technology in India.
 Which of the statement/s given above is/are correct?
 (A) Only (1) and (2) (B) Only (2) and (3) (C) Only (1) (D) (1), (2) and (3)
128. The people of which tribe are found in the majority in Baran district?
 (A) Garasia (B) Bhil (C) Meena (D) Saharia
129. Which satellite system is mainly used for disaster management support in India?
 (A) NavIC (B) AstroSat (C) RISAT (D) INSAT
130. What is the name of the military operation jointly carried out by the United States and Israel against Iran in 2026?
 (A) Operation Desert Storm (B) Operation Epic Fury
 (C) Operation Enduring Freedom (D) Operation Roaring Lion
131. Who are the mascots of the Census 2027?
 (A) Unnati - Shakti (B) Samriddhi - Vishwas
 (C) Sanskriti - Virasat (D) Pragati - Vikas
132. 'Sameer' is an App that provides hourly updates on the following -
 (A) Local Weather Forecast (B) Sound Pollution Index
 (C) Oceanic Water Quality Index (D) National Air Quality Index
133. Among the following lakes, which one is a salt water lake?
 (A) Bhimtal (B) Loktak (C) Barapani (D) Sambhar
134. Which of the following literary work is awarded by the Sahitya Akademi Award-2025?
 (A) Rakt-Samadhi (B) Ek Din Achanak
 (C) Dukkham-Sukkham (D) Jite Ji Allahabad
135. Who is the developer of India's first indigenous human spaceflight program, the "Gaganyaan Mission"?
 (A) DRDO (B) ISRO (C) CSIR (D) ICMR
136. When was the National Green Tribunal established?
 (A) 2010 (B) 2015 (C) 2017 (D) 2018
137. In the verdict of which one of the following cases, the Supreme Court has categorically laid down that no development project can receive post-facto environmental clearances?
 (A) Vanashakti V. Union of India (B) T.N. Godavarman Thirumulpad V. Union of India
 (C) M.C. Mehta V. Union of India (D) Ganga Lalwani V. Union of India
138. Which site became India's 44th UNESCO World Heritage Site in 2025?
 (A) Ajanta Caves (B) Maratha Military Landscapes
 (C) Moidams of Ahom Dynasty (D) Sundarban National Park

139. Which one of the following works was not written by Vijaydan Detha?
 (A) Chaudharain ki Chaturai (B) Duvidha
 (C) Batan Ri Phulwari (D) Jog - Sanjog
140. Who was Anjana Devi Choudhary?
 (A) Environmental activist (B) Famous poet
 (C) Non-violent freedom fighter (D) Radical feminist
141. In which district of Rajasthan, the 'Bassi Wildlife Sanctuary' is situated?
 (A) Dudu (B) Jaipur (C) Chittorgarh (D) Bhilwara
142. Which one of the following digital platforms integrates citizen services?
 (A) DigiLocker (B) UMANG (C) AADHAR (D) BharatNet
143. Who led the Civil Disobedience Movement in India's northwestern border region?
 (A) Khan Abdul Ghaffar Khan (B) Raja Mahendra Pratap
 (C) Sarojini Naidu (D) Womesh Chandra Banerjee
144. In the ranking of happiness (2023-2025), which country is ranked first in the World Happiness Report, 2026?
 (A) Norway (B) Sweden (C) Finland (D) Iceland
145. GEO-7 report by UNEP was released in which year?
 (A) 2023 (B) 2024 (C) 2025 (D) 2026
146. Consider the following statements regarding the Rajasthan State Legislative Assembly and choose the correct answer with the help of the code given below -
 (I) The strength of the Rajasthan Legislative Assembly was 160 in 1952 and stands 200 since the Fifth Assembly.
 (II) It was not continuing in 1967, 1977, 1980 and 1992 due to the President Rule.
 (A) Both (I) and (II) are true (B) Both (I) and (II) are false
 (C) (I) is true but (II) is false (D) (I) is false but (II) is true
147. Who was awarded the highest Gallantry Award - Ashok Chakra on the Republic Day, 2026?
 (A) Arshdeep Singh (B) Shubhanshu Shukla
 (C) Doleshwar Subba (D) Anshul Baltoo
148. Consider the following United Nation's Summits on environmental issues -
 (I) One Planet Summit (II) First Earth Summit
 (III) Millennium Summit (IV) First Stockholm Conference on Human Environment
 Arrange the above Summits in chronological order -
 (A) (I), (II), (III), (IV) (B) (IV), (II), (III), (I)
 (C) (II), (III), (IV), (I) (D) (III), (II), (I), (IV)
149. Who is the Indian woman who won the FIDE Women's Chess World Cup held in Batumi, Georgia in 2025?
 (A) Koneru Humpy (B) Divya Deshmukh (C) Harika Dronavalli (D) R. Vaishali
150. In which Congress Session, the launch of the Non-Cooperation Movement was approved?
 (A) Calcutta Session of 1920 (B) Nagpur Session of 1920
 (C) Amritsar Session of 1919 (D) Bombay Session of 1918

Section-D
English

Direction : (Q. No. 151 to 155) - Read the passage and answer the questions given below -

Regular physical activity provides numerous health benefits, from leaner bodies and lower blood pressure to improved mental health and cognitive functioning. As the school physical programme promotes physical activity and can teach skills as well as form or change behaviour, it holds an important key to influencing health and well-being across the life span. To improve the fitness of students, we need to rethink the design and delivery of school-based physical education programme. Adults in the United States think that information about health was more important for students than to learn the content in language, arts, mathematics, science, history or any other subject. Our first step might be to consider ways to increase curriculum time devoted to physical education.

- 151.** According to Americans, health education is more important than teaching -
(A) Social Science (B) Natural Science (C) Any Subject (D) History
- 152.** In order to improve physical education programme, we should -
(A) increase school time. (B) employ qualified physical instructors.
(C) increase number of classrooms. (D) increase attendance of the students.
- 153.** In order to tone up the physical education programme in schools -
(A) it should be made compulsory in schools.
(B) existing programme should be changed.
(C) a committee should be set up in schools.
(D) the programme should be reoriented and implemented.
- 154.** According to the passage, we must consider ways to -
(A) give training to teachers.
(B) improve classroom teaching.
(C) give more time for physical education in curriculum.
(D) give less curriculum time to physical education.
- 155.** According to this passage, regular physical activity is needed to -
(A) control one's blood pressure (B) lose one's weight
(C) improve one's cognitive skills (D) improve one's physical as well as mental health
- 156.** Write one word for -
One who is devoid of kind feelings and sympathy.
(A) Cruel (B) Ruthless (C) Callous (D) Indifferent
- 157.** Choose the correct Direct form -
She asked for a cup of coffee.
(A) "Could I have a cup of coffee", she said. (B) "Can you give me a cup of coffee?", she said.
(C) "Could I have a cup of coffee?" she said. (D) "Will you give me a cup of coffee?" she said.
- 158.** I readily closed with his offer.
The meaning of the underlined idiom is -
(A) accepted (B) rejected (C) postponed (D) changed
- 159.** Fill in the blank with appropriate modal -
What is the point in crying over the spilt milk? You have listened to us earlier.
(A) would (B) should (C) can (D) must
- 160.** Choose the correct Indirect form -
"Who do you want to speak to?", said the telephonist.
(A) She asked with whom I wanted to speak to. (B) She inquired whom I wanted to speak to.
(C) She asked who I wanted to speak to. (D) She inquired who do I wanted to speak to.
- 161.** Complete the sentence with a suitable answer -
You don't recognise me,
(A) could you? (B) do you? (C) must you? (D) did you?
- 162.** This is the man I suspected.
(A) what (B) who (C) whom (D) which
- 163.** Choose the correct phrasal verb -
The little girl couldn't the balloon.
(A) blow out (B) blow up (C) fill up (D) blow into

164. It rain later so take an umbrella.
 (A) can (B) would (C) should (D) might
165. Identify the correct sentence from the following sentences -
 (A) She will rather be quiet than answer back rudely.
 (B) She would rather be quiet than answer back rudely.
 (C) She would rather be quiet then answer back rudely.
 (D) She will rather be quiet then answer back rudely.
166. The prisoner was released on for good behaviour.
 (A) parole (B) probation (C) bail (D) guarantee
167. The bridal was fringed with lace.
 (A) vale (B) veil (C) wail (D) well
168. Select the option that contains no spelling error -
 (A) The conversation mieandered on for hour after the meeting was over.
 (B) The conversation meendered in for hours after the meeting was over.
 (C) The conversation meindered in for hours after the meeting was over.
 (D) The conversation meandered on for hours after the meeting was over.
169. Fill in the blank with the correct option -
 We stayed days in Jaipur and visited Hawa Mahal.
 (A) few (B) a little (C) a few (D) little
170. I heard my name called. In this sentence, 'called' is -
 (A) Noun (B) Past Participle (C) Subject (D) Object
171. Identify the correct sequence of the sentence -
 (P) you (Q) to stay (R) I (S) would like
 (A) S P Q R (B) Q R P S (C) S R Q P (D) R S P Q
172. Choose the correct passive form -
 They are demolishing the entire block.
 (A) The entire block was being demolished. (B) The entire block has been demolished.
 (C) The entire block was been demolished. (D) The entire block is being demolished.
173. Ram agreed to my orders.
 (A) carry away (B) carry on (C) carry out (D) carry off
174. Had you worked hard, you.....passed.
 (A) would (B) will (C) would have (D) will have
175. Mark synonym of the word 'Vigorous' -
 (A) Clever (B) Cool (C) Energetic (D) Sharp
176. Mark the most appropriate synonym of the word 'Primordial' -
 (A) Primary (B) Ancient (C) Classical (D) Aboriginal
177. Rahul's father works as electrician.
 (A) the (B) a (C) an (D) no article
178. Fill in the blank with the correct preposition -
 The driver jumped the car.
 (A) of (B) at (C) in (D) off
179. "He liked my suggestion." Change into a complex sentence.
 (A) It was what he liked. (B) He liked what I suggested.
 (C) My suggestion was he liked. (D) He liked me and suggested.
180. Choose the word with correct spelling -
 (A) Pnemonia (B) Pneumonia (C) Nemonia (D) Penomonia
181. Identify the correct order of the sentence -
 (p) round his grave (q) and myrtles (r) he is buried (s) near Rome (t) grow
 The correct sequence is -
 (A) pqrst (B) qtrsp (C) rsqpt (D) rsqtp
182. Add suitable form of "Be" Verb -
 Neither Seema nor Mohan there.
 (A) was (B) were (C) being (D) been

183. Identify the tense used in the following sentence -
He has been sleeping for five hours.
(A) Present Perfect Continuous (B) Present Continuous
(C) Present Simple (D) Present Perfect
184. Choose the correct option for the sentence -
“Handwriting that cannot be read.”
(A) Ineligible (B) Illegitimate (C) Unedited (D) Illegible
185. Identify the correctly spelt word -
(A) Abismal (B) Ebysmal (C) Abysmal (D) Abysmel
186. Complete the sentence with the correct option -
“The wounded soldier fell the ditch.”
(A) in (B) at (C) into (D) within
187. “Have you submitted your report yet?” Change into indirect speech.
(A) She asked him if he had submitted his report till then.
(B) She asked him whether he has submitted his report yet.
(C) She asked him if he was submitted the report till now.
(D) She asked to submit his report now.
188. You are unable to the meaning of this passage.
(A) make off (B) make out (C) make over (D) make up
189. Complete the sentence with the correct option -
He must do it he likes it not.
(A) whether, or (B) rather, than (C) so, that (D) hardly, when
190. He asked if I liked fish.
The underlined word is -
(A) Interjection (B) Preposition (C) Conjunction (D) Adjunct
191. Choose the correct phrasal verb -
A huge crowd to see the international football match.
(A) turned up (B) was present (C) turned over (D) came
192. Choose the correct Indirect form -
“Did any of you actually see the accident happen?”, said the policeman.
(A) The policeman asked if any of them actually saw the accident happen.
(B) The policeman asked if any of us had actually seen the accident happen.
(C) The policeman asked if any of us actually saw the accident happen.
(D) The policeman said if any of us had actually seen the accident happen.
193. Write one word for -
One who is an associate in crime.
(A) Co-partner (B) Criminal (C) Accomplice (D) Partner-in-crime
194. There is hardly reason to doubt his intentions.
(A) some (B) much (C) every (D) any
195. Mark correct antonym of the word ‘Lazy’ -
(A) Industrious (B) Weaken (C) Begin (D) Careless
196. Choose the correct option to complete the sentence -
..... what I know him, I hesitate to trust him.
(A) By, from (B) At, of (C) From, from (D) From, of
197. Rohit as well as my sister in college now.
(A) am (B) is (C) are (D) has
198. Choose the correct option -
She hasn’t come yet,?
(A) has she (B) had she (C) hasn’t she (D) isn’t she
199. Fill in the blank with the correct phrasal verb -
He does not with my brother.
(A) find out (B) keep on (C) look after (D) get along
200. Choose the correct option for the sentence -
“A person who hates women.”
(A) Intolerant (B) Misogynist (C) Bigamist (D) Gullible

Section-D
Hindi

151. 'च' वर्ग के व्यंजन का उच्चारण स्थान है –
 (A) कंठ (B) मूर्धा (C) दंत (D) तालु
152. निम्न में से मूर्धन्य वर्ण है –
 (A) क और ग (B) र और ट (C) ल और स (D) च और छ
153. 'पैर से लेकर सिर तक' वाक्यांश के लिए एक शब्द प्रयुक्त होगा –
 (A) सपाद (B) सिरोपा (C) आपादमस्तक (D) शिरोधार्य
154. निम्न में अर्द्धस्वर है –
 (A) र (B) ल (C) य (D) म
155. निम्न शब्दों को शब्दकोश में क्रम से संयोजित करें –
 1. क्रांति 2. क्षेत्र 3. कृष्ण 4. कँगना
 (A) 1 - 2 - 3 - 4 (B) 1 - 4 - 3 - 2 (C) 4 - 1 - 2 - 3 (D) 3 - 4 - 1 - 2
156. निम्न में से किस विकल्प में सभी शब्द शुद्ध हैं?
 (A) मुमूर्ष, शुश्रूषा, द्वारका, महात्म्य (B) मूमूर्ष, सुश्रूषा, द्वारका, महात्म्य
 (C) मूमूर्ष, श्रूशुषा, द्वारिका, महात्म्य (D) मुमूर्ष, शूश्रुषा, द्वारिका, महात्म्य
157. व्याकरण की दृष्टि से शुद्ध वाक्य है –
 (A) कक्षा में कोई लगभग पचास विद्यार्थी आये थे। (B) उसने अपनी बात सप्रमाण सहित कही।
 (C) उसने घर के अन्दर प्रवेश किया। (D) मुझे केवल तीस रुपए चाहिए।
158. निम्न में स्वर सन्धि युक्त शब्द नहीं है –
 (A) देव + इन्द्र = देवेन्द्र (B) सदा + एव = सदैव
 (C) अभि + सेक = अभिषेक (D) अनु + इत = अन्वित
159. 'आँख रखना' मुहावरे का अर्थ है –
 (A) प्यार करना (B) इज़्जत बचाना (C) शर्म आ जाना (D) निगरानी करना
160. अनेक शब्दों (परबंधों या वाक्यांशों) के स्थान पर एक शब्द का सही प्रयोग नहीं हुआ है –
 (A) सेना का वह भाग जो सबसे आगे रहता है – हरावल
 (B) जो अपनी पत्नी के साथ हो – सपत्नीक
 (C) किसी बात के मर्म (गूढ़ रहस्य) को जानने वाला – मुमुक्षु
 (D) रात्रि में विचरण करने वाला – निशाचर
161. निम्न में प्रत्यय युक्त शब्द नहीं है –
 (A) भाषण (B) पुकार (C) बढ़ावा (D) उद्योग
162. तत्सम शब्द है –
 (A) मोती (B) परछाँई (C) यशोदा (D) जनेऊ
163. योगरूढ़ शब्द है –
 (A) गजानन (B) कृष्णार्पण (C) राजमाता (D) राष्ट्रपति

164. निम्न में समास के विसंगत उदाहरण हैं –
 (A) प्रतिदिन : अव्ययीभाव (B) ग्रामवास : तत्पुरुष
 (C) पीतांबर : कर्मधारय (D) चहार दीवारी : बहुव्रीहि
165. निम्न में अशुद्ध तत्सम – तद्भव युग्म है –
 (A) नकुल – नेवला (B) जामाता – दामाद (C) वामन – बौना (D) वक्र – बगुला
166. शुद्ध वाक्य है –
 (A) यह विषय अत्यंत कठोर है। (B) वे अपना भावी जीवन यहीं बिताएँगे।
 (C) वह आरोग्य हो गया। (D) वहाँ अपार जनसमूह उमड़ पड़ा।
167. निम्न में शुद्ध वर्तनी है –
 (A) रूई (B) गुरु (C) रुठना (D) वधू
168. निम्न में मिश्र वाक्य का उदाहरण है –
 (A) मैं आगे बढ़ गया और वह पीछे रह गया।
 (B) जहाँ सुमति तहाँ संपति नाना।
 (C) मरता क्या नहीं करता।
 (D) मुझे उन लोगों का भेद लेना था, सो मैं वहाँ ठहर कर उनकी बातें सुनने लगा।
169. उक्लिप्त व्यंजन का उदाहरण है –
 (A) क्ष (B) ढ (C) ष (D) ल
170. निम्न में स्त्रीलिंग नहीं है –
 (A) रात (B) आयु (C) कृपा (D) अश्रु
171. विभक्ति युक्त शब्द कहलाता है –
 (A) वाक्य (B) वर्ण (C) पद (D) अनुच्छेद
172. 'तत्पुरुष' समास युक्त शब्द नहीं है –
 (A) जन्मांध (B) देश भक्ति (C) पराधीन (D) श्याम सुंदर
173. निम्नलिखित में से 'बुद्धि' का पर्याय है –
 (A) द्युति (B) चपला (C) मर्त्य (D) प्रज्ञा
174. निम्न में अल्पप्राण व्यंजन है –
 (A) ख (B) ढ (C) भ (D) य
175. "बीमारी के कारण मुझसे चला नहीं जाता।" वाक्य में वाच्य है –
 (A) कर्तृ वाच्य (B) भाव वाच्य
 (C) कर्म वाच्य (D) उपर्युक्त में से कोई नहीं
176. निम्नांकित में असंगत कारक – चिन्ह है –
 (A) संप्रदान : को, के लिए (B) संबंध : का, के, की
 (C) कर्म : ने (D) अधिकरण : में, पर

177. 'घोटक' शब्द किसका पर्यायवाची है?
 (A) हय (B) शशि (C) विषाद (D) कृपाण
178. विराम चिह्न की दृष्टि से शुद्ध वाक्य है –
 (A) वाह! कितना सुन्दर दृश्य है। (B) वाह, कितना सुन्दर दृश्य है।
 (C) वाह! कितना सुन्दर दृश्य है? (D) वाह; कितना सुन्दर दृश्य है :-
179. प्रत्यय और शब्द की दृष्टि से सही विकल्प नहीं है –
 (A) न – उड़ान (B) आवट – लिखावट (C) ना – लिखना (D) अनीय – पूजनीय
180. 'गाँधी भारत के इतिहास में अमर हैं।' रेखांकित पद में संज्ञा प्रकार है –
 (A) जातिवाचक (B) व्यक्तिवाचक (C) भाववाचक (D) कोई नहीं
181. 'जो मापा न जा सके' वाक्यांश के लिए उपयुक्त एक शब्द है –
 (A) अपरिमित (B) अनागत (C) अप्रत्याशित (D) असंभव
182. भाषा की सबसे छोटी इकाई है –
 (A) स्वर (B) व्यंजन (C) शब्द (D) ध्वनि
183. उर्दू उपसर्ग के योग से बना शब्द नहीं है –
 (A) नादान (B) गैर हाज़िर (C) कमज़ोर (D) निकम्मा
184. "मैं नौकर से काम करवाता हूँ।" वाक्य में प्रयुक्त धातु-रूप है –
 (A) नाम धातु (B) अनुकरणात्मक (C) प्रेरणार्थक (D) विपरीतार्थक
185. 'आदमी', 'चाकू', 'बाग', 'गुलाब' आदि शब्द किस विदेशी भाषा से हिन्दी में आए?
 (A) अरबी (B) तुर्की (C) फ़ारसी (D) पोर्तुगीज
186. 'देशभक्ति' में कौनसा समास है?
 (A) करण तत्पुरुष (B) कर्म तत्पुरुष (C) संप्रदान तत्पुरुष (D) संबंध तत्पुरुष
187. 'संहार' शब्द में उपसर्ग है –
 (A) स (B) सम् (C) सः (D) संह
188. "चमड़ी चली जाए पर दमड़ी न जाए" वाक्य में समुच्चयबोधक भेद है –
 (A) संयोजक (B) वियोजक (C) विरोधदर्शक (D) परिणामदर्शक
189. तत्सम से तद्भव शब्द की दृष्टि से सही विकल्प है –
 (A) आर्द्रक – अदरक (B) कूष्माण्ड – कुम्हार
 (C) चर्वण – चना (D) चक्रवाक – चक्का
190. 'दूध से दही बनता है।' इस वाक्य में कारक है –
 (A) करण (B) अपादान (C) अधिकरण (D) सम्प्रदान
191. 'देव्यर्पण' शब्द का सही संधि-विच्छेद है –
 (A) देव + अर्पण (B) देवी + अर्पण (C) देव्य + अर्पण (D) देवा + अर्पण
192. समाहार द्वंद्व समास का उदाहरण है –
 (A) सत्यासत्य (B) भूल – चूक (C) लोटा – डोर (D) राधा – कृष्ण

193. मुहावरे और उसके अर्थ की दृष्टि से सही विकल्प नहीं है –
 (A) गाल बजाना – अभिमान प्रकट करना (B) गुड़ गोबर करना – बना काम बिगाड़ना
 (C) गाढ़े की कमाई होना – बहुत लाभ होना (D) गुण मानना – कृतज्ञ होना
194. निम्न में विसंगत विपरीतार्थी शब्द – समूह है –
 (A) अंतरंग – बहिरंग (B) सूक्ष्म – स्थूल (C) सामिष – निरामिष (D) समूल – आमूल
195. 'महर्षि' शब्द में कौनसी संधि है?
 (A) दीर्घ संधि (B) यण संधि (C) अयादि संधि (D) गुण संधि

निर्देश (प्रश्न संख्या 196 – 200) अनुच्छेद का अध्ययन कर पूछे गए प्रश्नों के सर्वाधिक उपयुक्त उत्तर दीजिए –

भाषा ऐसी होनी चाहिए जो सरल हो और भावों को बिलकुल ठीक-ठीक अभिव्यक्त करने की क्षमता से सम्पन्न हो। इस कार्य के लिए होशियारी से चुने हुए शब्दों की आवश्यकता है। मैं नहीं जानता हूँ कि होशियारी से शब्द चुनना किसे कहते हैं। शब्दकोश में तो शब्द ही शब्द भरे होते हैं, पर मैं लाख होशियारी भी बरतूँ तो उनमें से क्या अपने लिए कोई शब्द चुन सकता हूँ? मैं समझता हूँ कि शब्द होशियारी से नहीं चुना जाता, अंतस्संज्ञा उसे आप चुन लेती है – मन के भीतर के शब्दकोश में से। मुझे लगता है कि जब मन में कोई भाव उठता है तो अपने साथ अभिव्यक्ति की संज्ञा भी लिए रहता है जो स्पष्ट हुई तो शब्द झट मिल जाता है और अस्पष्ट या धूमिल – सी हुई तो सृजन की उस प्रक्रिया में एक के बाद दूसरा शब्द उपस्थित चुनौती का सामना करने के लिए मन की गहराइयों में से उठकर ऊपर आ जाता है – वैसे ही जैसे सीता – स्वयंवर में एक के बाद दूसरा वीर उस धनुष की प्रत्यंचा चढ़ाने के लिए आया था और अपना सा मुँह लेकर चला गया था। जब ठीक – ठीक शब्द मिल जाता है तब सर्जक मन परम सुख से उसके गले में वरमाला डाल देता है, वैसे ही जैसे सीताजी ने भगवान् रामचंद्रजी के गले में वरमाला डाल दी थी। मेरे लिए अभिव्यक्ति ऐसा ही एक स्वयंवर है।

196. 'अंतस्संज्ञा' का अभिप्राय है –
 (A) मन की बात (B) आंतरिक चेतना (C) अंतिम शब्द (D) संज्ञा का भेद
197. इस गद्यांश में लेखक ने मुख्य रूप से –
 (A) सीता स्वयंवर का चित्रण किया है।
 (B) भाषा विज्ञान की व्याख्या की गई है।
 (C) अभिव्यक्ति की प्रक्रिया और सहज शब्द प्रयोग पर बल दिया है।
 (D) समाज की मनोवृत्ति बताई है।
198. 'अभिव्यक्ति' हेतु आवश्यक है –
 (A) शब्दकोश का ज्ञान (B) होशियारी
 (C) सभी विषयों का ज्ञान (D) भीतर से निकले सहज सरल शब्द
199. संपूर्ण गद्यांश का केन्द्रीय भाव है –
 (A) साहित्य का महत्व प्रतिपादित करना
 (B) साहित्य के निर्माण में चमत्कारपूर्ण भाषा के योगदान को चित्रित करना
 (C) साहित्य और सामान्य अभिव्यक्ति में सहज, स्वतः स्फूर्त शब्दों का प्रयोग श्रेयस है।
 (D) इनमें से कुछ नहीं
200. अभिव्यक्ति को स्वयंवर कहने का तात्पर्य है, उसमें –
 (A) प्रदर्शन की भावना होती है।
 (B) सार्वजनिक सहयोग होता है।
 (C) लेखक की विद्वता प्रकट होती है।
 (D) उचित शब्द को स्वयं खोज लेने की क्षमता होती है।

Space for Rough Work